



Goa Staff Selection Commission  
6th Floor,3rd Lift SPACES Building, Patto - Plaza Panaji - Goa 403001

Computer Based Test  
Post Name : Junior Stenographer

Question Description	ताकाक वचून गाडगो क्वाक ल्हीपोवचो? हे ओपरीत गाडगो म्हणल्यार किदें ?
A	गायेचें पाडूक
B	गाढवाचें पिल
C	आयदन
D	धुकलपाचो गाडो
E	None of the above
Correct Answer	C
Marks	1

<b>Question Description</b>	‘आमट-आमसाण, ओलें-ओलसाण, मोव-मोवसाण, पुण शाणो---
<b>A</b>	पिसो
<b>B</b>	शापोतेर
<b>C</b>	अबरगत
<b>D</b>	शाणेपण
<b>E</b>	None of the above
<b>Correct Answer</b>	D
<b>Marks</b>	1

<b>Question Description</b>	राय नावाचो गांव आसा, पुण कोंकणी भाशेंत 'राय' म्हटल्यार _____.
<b>A</b>	रांदपी
<b>B</b>	राजा
<b>C</b>	रंगीत
<b>D</b>	रांपण
<b>E</b>	None of the above
<b>Correct Answer</b>	B
<b>Marks</b>	1

<b>Question Description</b>	गाळण्यातल्यान गाळटात, चाळणींतल्यान चाळतात आनी दात्यांतल्यान _____
<b>A</b>	दांतरी (धार) काडतात
<b>B</b>	दांत घासतात
<b>C</b>	धोतर शिवतात
<b>D</b>	दळटात
<b>E</b>	None of the above
<b>Correct Answer</b>	D
<b>Marks</b>	1

<b>Question Description</b>	कावळो: कांवकांव, माजर:म्यांव म्यांव जाल्यार सुणो: _____
<b>A</b>	चूक चूक
<b>B</b>	कुक कुक
<b>C</b>	सांव सांव
<b>D</b>	भूक भूक
<b>E</b>	None of the above
<b>Correct Answer</b>	D
<b>Marks</b>	1

**Question Description** पोटॉत कावळे रडप म्हळ्यार \_\_\_\_\_

**A** न्हीद येवप

**B** पोटॉत दुखप

**C** खूब भूक लागप

**D** खूब तान लागप

**E** None of the above

**Correct Answer** C

**Marks** 1

**Question Description** आशेभगत ह्या उतराक खंयचो पर्याय लागीं आसा ?

**A** लोभी

**B** देवभक्त

**C** भोगणार

**D** असकड

**E** None of the above

**Correct Answer** A

**Marks** 1

<b>Question Description</b>	मोगरेक मोगरीं, गोटलिणीक गोटलां, चाफ्याक चाफीं आनी तुळशीक जातात तीं .....
<b>A</b>	केसरां
<b>B</b>	कणेरां
<b>C</b>	दसणेफुलां
<b>D</b>	शब्दुली
<b>E</b>	None of the above
<b>Correct Answer</b>	A
<b>Marks</b>	1

<b>Question Description</b>	सरकारान तो आदेश फाटीं घेतलो . फाटीं घेतलो म्हळ्यार
<b>A</b>	मुखार धुकललो
<b>B</b>	रद्द केलो
<b>C</b>	स्थगीत केलो
<b>D</b>	लागू केलो
<b>E</b>	None of the above
<b>Correct Answer</b>	B
<b>Marks</b>	1

Question Description	दर्यांत तारवां आनी गोठ्यांत _____.
----------------------	------------------------------------

A	गोठलां
---	--------

B	गोरवां
---	--------

C	कालवां
---	--------

D	गोठाणी
---	--------

E	None of the above
---	-------------------

Correct Answer	B
----------------	---

Marks	1
-------	---

### Comprehension

**Read the passage carefully and answer the questions given below :**

My father was a Diwan, but nevertheless a servant, and all the more so because he was in favour with the Thakore Saheb. The latter would not let him go until the last moment. And when he did so, he ordered for my father special stage coaches, reducing the journey by two days. But the fates had willed otherwise. Porbandar is 120 miles from Rajkot - a cart journey of five days. My father did th distance in three, but the coach toppled over in the third stage, and he sustained severe injuries. He arrived bandages all over. Both his and our interest in the coming event was half destroyed, but the ceremony had to be gone through. For how could the marriage dates be changed? However, I forgot my grief over my father's injuries in the childish amusement of the wedding.

I was devoted to my parents. But no less was I devoted to the passions that flesh is heir to. I had yet to learn that all happiness and pleasure should be sacrificed in devoted service to my parents. And yet, as though by way of punishment for my desire for pleasures, an incident happened, which has ever sinceranked in my mind and which I will relate later. Nishkulanand sings: 'Renunciation of objects, without the renunciation of desires, is short-lived, however hard you may try'. Whenever I sing this song or hear it sung, this bitter untoward incident rushes to my memory and fills me with shame.

<b>Question Description</b>	Which word in the above passage is synonymous to 'dedicated'?
<b>A</b>	sustained
<b>B</b>	amusement
<b>C</b>	devoted
<b>D</b>	renunciation
<b>E</b>	None of the above
<b>Correct Answer</b>	C
<b>Marks</b>	1

Comprehension	<p><b>Read the passage carefully and answer the questions given below :</b></p> <p>My father was a Diwan, but nevertheless a servant, and all the more so because he was in favour with the Thakore Saheb. The latter would not let him go until the last moment. And when he did so, he ordered for my father special stage coaches, reducing the journey by two days. But the fates had willed otherwise. Porbandar is 120 miles from Rajkot - a cart journey of five days. My father did th distance in three, but the coach toppled over in the third stage, and he sustained severe injuries. He arrived bandages all over. Both his and our interest in the coming event was half destroyed, but the ceremony had to be gone through. For how could the marriage dates be changed? However, I forgot my grief over my father's injuries in the childish amusement of the wedding.</p> <p>I was devoted to my parents. But no less was I devoted to the passions that flesh is heir to. I had yet to learn that all happiness and pleasure should be sacrificed in devoted service to my parents. And yet, as though by way of punishment for my desire for pleasures, an incident happened, which has ever sincerankled in my mind and which I will relate later. Nishkulanand sings:'Renunciation of objects, without the renunciation of desires, is short-lived, however hard you may try'. Whenever I sing this song or hear it sung, this bitter untoward incident rushes to my memory and fills me with shame.</p>
Question Description	In the passage given above, to what event does the father arrive 'bandaged all over'?
A	Wedding
B	Birthday
C	Anniversary
D	Naming ceremony
E	None of the above
Correct Answer	A
Marks	1



Comprehension	<p><b>Read the passage carefully and answer the questions given below :</b></p> <p>My father was a Diwan, but nevertheless a servant, and all the more so because he was in favour with the Thakore Saheb. The latter would not let him go until the last moment. And when he did so, he ordered for my father special stage coaches, reducing the journey by two days. But the fates had willed otherwise. Porbandar is 120 miles from Rajkot - a cart journey of five days. My father did th distance in three, but the coach toppled over in the third stage, and he sustained severe injuries. He arrived bandages all over. Both his and our interest in the coming event was half destroyed, but the ceremony had to be gone through. For how could the marriage dates be changed? However, I forgot my grief over my father's injuries in the childish amusement of the wedding.</p> <p>I was devoted to my parents. But no less was I devoted to the passions that flesh is heir to. I had yet to learn that all happiness and pleasure should be sacrificed in devoted service to my parents. And yet, as though by way of punishment for my desire for pleasures, an incident happened, which has ever sincerankled in my mind and which I will relate later. Nishkulanand sings:'Renunciation of objects, without the renunciation of desires, is short-lived, however hard you may try'. Whenever I sing this song or hear it sung, this bitter untoward incident rushes to my memory and fills me with shame.</p>
Question Description	In the above passage, the word 'rankled' means:
A	agitated
B	disturbed
C	bothered
D	All of the above
E	None of the above
Correct Answer	D
Marks	1

<b>Question Description</b>	<b>Change to passive voice:</b>  <b>I saw a dark cloud.</b>
<b>A</b>	I am seeing a dark cloud.
<b>B</b>	A dark cloud is being seen by me.
<b>C</b>	A dark cloud was seen by me.
<b>D</b>	A dark cloud has been seen by me.
<b>E</b>	None of the above
<b>Correct Answer</b>	C
<b>Marks</b>	1

<b>Question Description</b>	The expression ‘ <b>to lead others up the garden</b> ’ means
<b>A</b>	To guide others
<b>B</b>	To teach others
<b>C</b>	To deceive others
<b>D</b>	To take care of others
<b>E</b>	None of the above
<b>Correct Answer</b>	C
<b>Marks</b>	1

<b>Question Description</b>	The expression ‘ <b>a close fisted</b> ’ man means
<b>A</b>	A miser
<b>B</b>	A philanthropist
<b>C</b>	A fighter
<b>D</b>	A stubborn person
<b>E</b>	None of the above
<b>Correct Answer</b>	A
<b>Marks</b>	1

Question Description	On the first day of hostel life, I felt like <i>a fish out of water</i> . This means I was
A	nervous
B	upset
C	angry
D	uncomfortable
E	None of the above
Correct Answer	D
Marks	1

Question Description	Choose the correct alternative.
A	He doesn't know the place perhaps.
B	He doesn't perhaps know the place.
C	He perhaps doesn't know the place.
D	Perhaps he doesn't know the place.
E	None of the above
Correct Answer	D
Marks	1

Question Description	Which of the following sentences is correct?
A	Her refusal working on the project earned her a lot of admiration.
B	Her refusal for work on the project earned her a lot of admiration.
C	Her refusal in working on the project earned her a lot of admiration.
D	Her refusal to work on the project earned her a lot of admiration.
E	None of the above
Correct Answer	D
Marks	1

<b>Question Description</b>	Choose the correct alternative to fill in the blank.  Sneha is very _____. She enjoys being with people.
<b>A</b>	argumentative
<b>B</b>	sociable
<b>C</b>	assertive
<b>D</b>	inquisitive
<b>E</b>	None of the above
<b>Correct Answer</b>	B
<b>Marks</b>	1

<b>Question Description</b>	Choose the correct option to fill in the blank.  The weather is getting bad. We shall have to _____ .
<b>A</b>	return back
<b>B</b>	turn
<b>C</b>	return
<b>D</b>	about turn
<b>E</b>	None of the above
<b>Correct Answer</b>	C
<b>Marks</b>	1

<b>Question Description</b>	What is the meaning of the following sentence?  I have a black and a white dog.
<b>A</b>	I have a dog which is both black and white
<b>B</b>	I have two dogs. One is black. The other is white.
<b>C</b>	I have a dog by the name of black.
<b>D</b>	I have a black dog.
<b>E</b>	None of the above
<b>Correct Answer</b>	B
<b>Marks</b>	1



Question Description	Could you help me with the dish washing _____ I get some provisions from the store?
A	after
B	before
C	while
D	since
E	None of the above
Correct Answer	C
Marks	1

Question Description	Choose the correct option to fill in the blank:  I wish it _____ stop raining.
A	will
B	would
C	may
D	might
E	None of the above
Correct Answer	B
Marks	1

<b>Question Description</b>	Fill in the blanks with the most appropriate preposition:  The peasant refused to grovel _____ the feet of his master.
<b>A</b>	by
<b>B</b>	at
<b>C</b>	upon
<b>D</b>	about
<b>E</b>	None of the above
<b>Correct Answer</b>	B
<b>Marks</b>	1

<b>Question Description</b>	The meaning of the word 'MILITANT' is the opposite of
<b>A</b>	spiritual
<b>B</b>	religious
<b>C</b>	pacifist
<b>D</b>	violent
<b>E</b>	None of the above
<b>Correct Answer</b>	C
<b>Marks</b>	1

<b>Question Description</b>	The meaning of ENERGIZE is the <b>opposite of</b>
<b>A</b>	Deactivate
<b>B</b>	Demotivate
<b>C</b>	Drain
<b>D</b>	Demoralise
<b>E</b>	None of the above
<b>Correct Answer</b>	C
<b>Marks</b>	1

<b>Question Description</b>	Choose the option closest in meaning to the word: ANTITHESIS
<b>A</b>	Lack of feeling
<b>B</b>	Musical response
<b>C</b>	Fixed dislike
<b>D</b>	Direct opposite
<b>E</b>	None of the above
<b>Correct Answer</b>	D
<b>Marks</b>	1

<b>Question Description</b>	The antonym of 'sharp' is
<b>A</b>	rugged
<b>B</b>	blunt
<b>C</b>	crude
<b>D</b>	witty
<b>E</b>	None of the above
<b>Correct Answer</b>	B
<b>Marks</b>	1

<b>Question Description</b>	ACOUSTICS is
<b>A</b>	A study of noise
<b>B</b>	A study of sound and sound waves
<b>C</b>	A study of animals
<b>D</b>	A study of musical instruments
<b>E</b>	None of the above
<b>Correct Answer</b>	B
<b>Marks</b>	1

<b>Question Description</b>	Zarin is 10 times younger than her mother. 2 years ago, her mother was 16 times as old as her. What is Zarin's present age?
<b>A</b>	7 years
<b>B</b>	3 years
<b>C</b>	4 years
<b>D</b>	5 years
<b>E</b>	None of the above
<b>Correct Answer</b>	D
<b>Marks</b>	1

Question Description	Consider the following data of 30 daily wage workers:					
	Rupees earned in a day	60-70	70-80	80-90	90-100	100-110
	No. of workers	8	9	15	12	6
	How many workers earn less than 90 rupees?					
A	17					
B	27					
C	32					
D	35					
E	None of the above					
Correct Answer	C , E					
Marks	1					

<b>Question Description</b>	The product of two numbers is 28812. If their HCF is 49, then their LCM is ?
<b>A</b>	1100
<b>B</b>	620
<b>C</b>	404
<b>D</b>	588
<b>E</b>	None of the above
<b>Correct Answer</b>	D
<b>Marks</b>	1

<b>Question Description</b>	If $345 \times 7890 - 56 = P + 94$ , then P is _____
<b>A</b>	2123400
<b>B</b>	2721900
<b>C</b>	2678922
<b>D</b>	2127890
<b>E</b>	None of the above
<b>Correct Answer</b>	B
<b>Marks</b>	1

Question Description	If $42 \div 6 - p + 2 - 1$ is equal to 1, then the value of p is ____
A	3
B	7
C	6
D	2
E	None of the above
Correct Answer	B
Marks	1

Question Description	$19 \times 7 - 25 \div 5 + 10$ is equal to
A	138
B	108
C	32
D	78
E	None of the above
Correct Answer	A
Marks	1



<b>Question Description</b>	If $2(x - y) = 3y$ , then what is the ratio of x to y ?
<b>A</b>	5:2
<b>B</b>	2:5
<b>C</b>	3:8
<b>D</b>	8:3
<b>E</b>	None of the above
<b>Correct Answer</b>	A
<b>Marks</b>	1

<b>Question Description</b>	Sachin bought a toy for Rs. 500 and later sold it for a profit of 27%. For how much did he sell the toy ?
<b>A</b>	Rs. 621
<b>B</b>	Rs. 657
<b>C</b>	Rs. 635
<b>D</b>	Rs. 550
<b>E</b>	None of the above
<b>Correct Answer</b>	C
<b>Marks</b>	1

<b>Question Description</b>	A simple interest of Rs. 250 is obtained on Rs.5000 after 2 years. The rate of interest during this period was _____.
<b>A</b>	2.5% per annum
<b>B</b>	3% per annum
<b>C</b>	5% per annum
<b>D</b>	4.5% per annum
<b>E</b>	None of the above
<b>Correct Answer</b>	A
<b>Marks</b>	1

<b>Question Description</b>	How much time would it take to complete 1500 rounds around a clock, assuming that each round takes 60 seconds?
<b>A</b>	25 hours
<b>B</b>	25 minutes
<b>C</b>	1500 hours
<b>D</b>	1500 seconds
<b>E</b>	None of the above
<b>Correct Answer</b>	A
<b>Marks</b>	1

**Question Description**

Select the option figure which is embedded in the given figure (Rotation is NOT allowed).



A



B



C



D



E

None of the above

**Correct Answer**

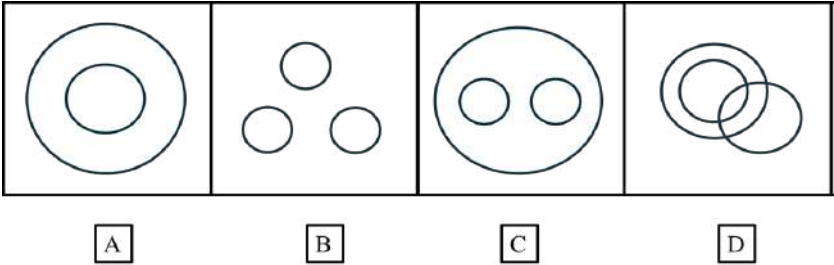
A

**Marks**

1

**Question Description**

What is the relationship between a Calculator, a Hammer, and a Spoon?



A

A

B

B

C

C

D

D

E






None of the above

**Correct Answer**

B

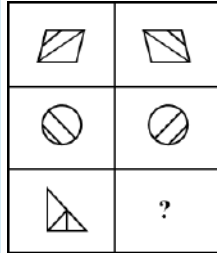
**Marks**

1

Question Description	Select the option figure which is embedded in the given figure (Rotation is NOT allowed).
	
A	
B	
C	
D	
E	None of the above
Correct Answer	C
Marks	1

**Question Description**

Select a suitable figure that will come in place of question mark?

**A****B****C****D****E**

None of the above

**Correct Answer**

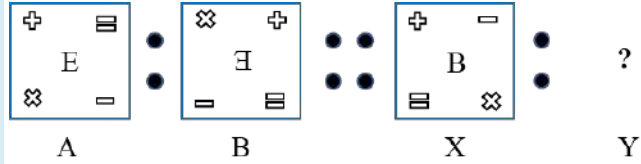
D

**Marks**

1

### Question Description

Pattern in box X is related to pattern in box Y in the same way as pattern in box A is related to pattern in box B. Which of the following box should be in Y?



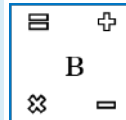
A



B



C



D



E

None of the above

Correct Answer

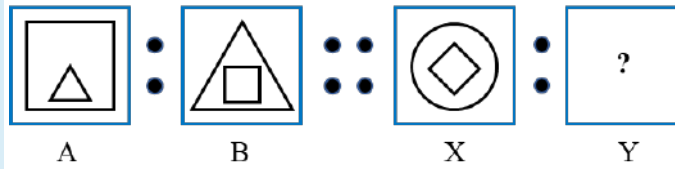
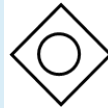
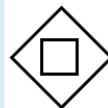
B

Marks

1

**Question Description**

Shapes in box X is related to shapes in box Y in the same way as shapes in box A is related to shapes in box B. Which of the following shapes should be in box Y?

**A****B****C****D****E**

None of the above

**Correct Answer**

B

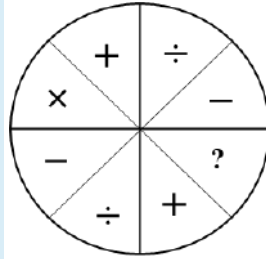
**Marks**

1



**Question Description**

Select a suitable symbol that will come in place of question mark?

**A**

=

**B**

×

**C**

>

**D**

÷

**E**

None of the above

**Correct Answer**

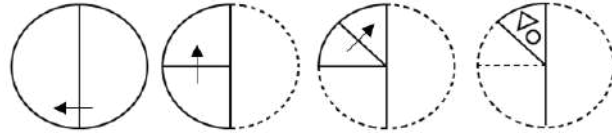
B

**Marks**

1

**Question Description**

A sequence of folding a piece of paper and the manner in which the folded paper has been cut is shown in the following figures.

**A****B****C****D****E**

None of the above

**Correct Answer**

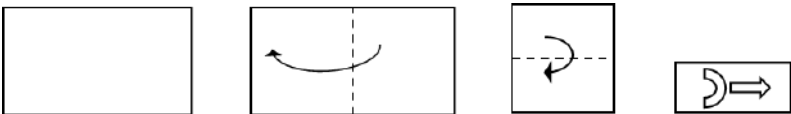
B

**Marks**

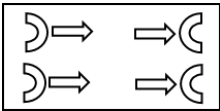
1

**Question Description**

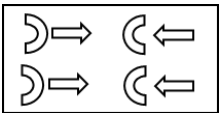
A sequence of folding a piece of paper and the manner in which the folded paper has been cut is shown in the following figures. How would this paper look when unfolded?



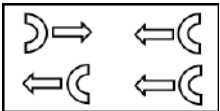
**A**



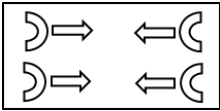
**B**



**C**



**D**



**E**

None of the above

**Correct Answer**





D

**Marks**

1

**Question Description**

Given below is a transparent sheet of paper with some patterns drawn on it. How would the transparent sheet look when it is folded on the dotted line ?  
(Folding direction is shown with an arrow)

**A****B****C****D****E**

None of the above

Correct Answer	C
Question Description	
Marks	1

<b>A</b>	blue – green grass
<b>B</b>	red – green sea
<b>C</b>	blue green sea
<b>D</b>	red-blue sky
<b>E</b>	None of the above
<b>Correct Answer</b>	C
<b>Marks</b>	1

<b>Question Description</b>	A person starts towards South direction. Which of the following orders will lead him to East direction?
<b>A</b>	Right, Right, Right
<b>B</b>	Left, Left, Left
<b>C</b>	Left, Right, Right
<b>D</b>	Right, Left, Right
<b>E</b>	None of the above
<b>Correct Answer</b>	A
<b>Marks</b>	1

<b>Question Description</b>	A person is standing facing East. He turns $90^0$ in clock-wise direction. Then he turns $180^0$ in same direction. He now turns $45^0$ in anti-clockwise direction. Which direction is he facing now?
<b>A</b>	North
<b>B</b>	South
<b>C</b>	North West
<b>D</b>	North East
<b>E</b>	None of the above
<b>Correct Answer</b>	C
<b>Marks</b>	1



<b>Question Description</b>	Arrange the following words in a logical sequence 1. Trillion 2. Thousand 3. Billion 4. Hundred 5. Million
<b>A</b>	1,2,4,3,5
<b>B</b>	1,5,3,2,4
<b>C</b>	4,2,3,5,1
<b>D</b>	4,2,5,3,1
<b>E</b>	None of the above
<b>Correct Answer</b>	D
<b>Marks</b>	1

<b>Question Description</b>	What should come in place of question mark (?) in the following number series?  <b>1, 6, 13, 22, 33, ?</b>
<b>A</b>	44
<b>B</b>	45
<b>C</b>	46
<b>D</b>	47
<b>E</b>	None of the above
<b>Correct Answer</b>	C
<b>Marks</b>	1

<b>Question Description</b>	Choose the word which is least like the others in the list.
<b>A</b>	Yellow
<b>B</b>	Black
<b>C</b>	Orange
<b>D</b>	Blue
<b>E</b>	None of the above
<b>Correct Answer</b>	B
<b>Marks</b>	1

<b>Question Description</b>	<p>There is a certain relation between two given words on one side of : : and one word is given on another side of : : while another word is to be found from the given alternatives, having the same relation with this word as the given pair has. Select the best alternatives.</p> <p>Hamlet is related to Village in the same way as Metropolis is related to?</p>
<b>A</b>	Urban
<b>B</b>	Place
<b>C</b>	City
<b>D</b>	District
<b>E</b>	None of the above
<b>Correct Answer</b>	C
<b>Marks</b>	1

<b>Question Description</b>	<p>Five friends named Divya, Kavya, Ramya, Priya and Siya have different weights. Divya is heavier than at least three of her friends while only Siya is lighter than Kavya. Who among the following is the heaviest of all ?</p>
<b>A</b>	Divya
<b>B</b>	Ramya
<b>C</b>	Priya
<b>D</b>	Cannot be determined
<b>E</b>	None of the above
<b>Correct Answer</b>	D
<b>Marks</b>	1

<b>Question Description</b>	Organize the provided words below into a meaningful sequence.  1. Dog 2. Cat 3. Apple 4. Elephant 5. Tiger
<b>A</b>	1, 2, 5, 4, 3
<b>B</b>	2, 3, 4, 1, 5
<b>C</b>	3, 2, 1, 4, 5
<b>D</b>	5, 3, 4, 2, 1
<b>E</b>	None of the above
<b>Correct Answer</b>	C
<b>Marks</b>	1

<b>Question Description</b>	<p>The question below consists of a question and two statements numbers I and II given below it. You have to decide whether the data provided in the statements are sufficient to answer the question. Read both the statements and answer the following question.</p> <p><b>What is R's position with respect to M?</b></p> <p><b>Statement I:</b> In a row of 25 students, R is sitting 13th from the right end of row and M is sitting 18th from left end of the row.</p> <p><b>Statement II:</b> R and M both are sitting 3rd and 8th from the right end of the row respectively.</p>
<b>A</b>	The data in Statement I alone is sufficient to answer the question, while the data in Statement II is alone not sufficient to answer the question.
<b>B</b>	The data in Statement II alone is sufficient to answer the question, while the data in Statement I is alone not sufficient to answer the question.
<b>C</b>	Either Statement I alone or Statement II alone is sufficient to answer the question.
<b>D</b>	The data in both statements I and II together is necessary to answer the question.
<b>E</b>	None of the above
<b>Correct Answer</b>	C
<b>Marks</b>	1