



Goa Staff Selection Commission
6th Floor,3rd Lift SPACES Building, Patto - Plaza Panaji - Goa 403001

COMPUTER BASED TEST
Post Name : Lower Division Clerk/Recovery Clerk

Question Description	एका ओपारी प्रमाधांव धांव धांवलो आनी
A	धोपर फोडून बसलो
B	तारी कडेन पावलो
C	पलतडी वचून आयलो
D	रड रड रडलो
E	None of the above
Correct Answer	B
Marks	1

Question Description	तणाचें कुडें, म्होंवा मुसांचें
A	जाळें
B	पाळें
C	पोळें
D	वाळें
E	None of the above
Correct Answer	C
Marks	1

Question Description	पन्नास वर्सा पुराय जातात तेन्ना ताका म्हणटात
A	भांगरा दबाजो
B	रुप्या दबाजो
C	कांश्या दबाजो
D	हिरक दबाजो
E	None of the above
Correct Answer	A
Marks	1

Question Description	फुडले वळेरेंत जें उतर हेरां मदीं जुळना वा लागना तें सांगात. धंय, म्होंव, तूप, लोणी
A	धंय
B	म्होंव
C	तूप
D	लोणी
E	None of the above
Correct Answer	B
Marks	1

Question Description	कुळागरांत माडयो आसात. माडयो म्हळ्यार कितें?
A	नीरपणसाचीं झाडां
B	सुपारी पोफळचीं झाडां
C	माडाचीं भिल्लमाडाचीं झाडां
D	पणसाचीं झाडां
E	None of the above
Correct Answer	B
Marks	1

Question Description	भायरी दिवप ह्या वाकप्रचाराचो अर्थ -
A	सहकार्य करप
B	मदत दिवप
C	घराभायर घालप
D	येतीश्ट तापोवप
E	None of the above
Correct Answer	D
Marks	1

Question Description	चूल ह्या उतराक कोंकणीत आनीक एक उतर आसा, तें
A	ओटो
B	मान्नें
C	मागीलदार
D	रांदन
E	None of the above
Correct Answer	D
Marks	1

Question Description	‘भिरांकूळ’ ह्या उतराचो कोंकणीत योग्य अर्थ सांगात.
A	भिरभिरपी
B	भिरांत दिसपा सारखो
C	भिरकटावन मारप
D	भिकारी
E	None of the above
Correct Answer	B
Marks	1

Question Description	अर्दो नाल्ल म्हणल्यार नाल्लाचें.....
----------------------	--------------------------------------

A	तळें
---	------

B	खळें
---	------

C	फळें
---	------

D	वळें
---	------

E	None of the above
---	-------------------

Correct Answer	D
----------------	---

Marks	1
-------	---

Question Description	नाताळाच्या दिसांनी घराघरांनी पेटयतात.
----------------------	---

A	दिवली
---	-------

B	नखेत्र
---	--------

C	पणती
---	------

D	दिवज
---	------

E	None of the above
---	-------------------

Correct Answer	B
----------------	---

Marks	1
-------	---

Question Description	She is too young to travel alone. (Remove the adverb too and Reframe the sentence.)
A	She is young to travel alone
B	She is so young that she cannot travel alone
C	She is too young to travel alone
D	She is too young that she can travel alone
E	None of the above
Correct Answer	B
Marks	1

Question Description	This is the end of the beginning. Identify the figure of speech
----------------------	--

A	Metaphor
---	----------

B	paradox
---	---------

C	irony
---	-------

D	simile
---	--------

E	None of the above
---	-------------------

Correct Answer	B
----------------	---

Marks	1
-------	---

Question Description	What is the figure of speech used in the sentence below? The baby was crawling and crying.
----------------------	---

A	Alliteration
---	--------------

B	Personification
---	-----------------

C	Hyperbole
---	-----------

D	Imagery
---	---------

E	None of the above
---	-------------------

Correct Answer	A
----------------	---

Marks	1
-------	---

Question Description	Atlas: Maps:: Folio:_____?
----------------------	----------------------------

A	papers
---	--------

B	accounts
---	----------

C	leaves
---	--------

D	photos
---	--------

E	None of the above
---	-------------------

Correct Answer	A
----------------	---

Marks	1
-------	---

Question Description	That museum is the newest building in our city.
----------------------	---

	(Choose the correct alternative from those provided below to rephrase the sentence using the Comparative Degree of Comparison)
--	--

A	No other building in our city is as new as the museum.
---	--

B	Other buildings are newer than that museum.
---	---

C	No other building in our city is newer than that museum.
---	--

D	The museum is as new as the other buildings in the city.
---	--

E	None of the above
---	-------------------

Correct Answer	C
----------------	---

Marks	1
-------	---

Question Description	Choose the part of the sentence that has an error : Gold is most expensive than other metals.
A	Gold is
B	most expensive
C	than other
D	metals
E	None of the above
Correct Answer	B
Marks	1

Question Description	Mark the word which is misspelt from the given options.
A	Contemporary
B	Honorary
C	Itinerary
D	Literary
E	None of the above
Correct Answer	C
Marks	1

Question Description	Choose the word which is correctly spelt in the given alternative
A	disperse
B	dispurse
C	desperse
D	despurse
E	None of the above
Correct Answer	A
Marks	1

Question Description	She arrived in Goa _____air on Saturday (Select the appropriate preposition)
A	through
B	at
C	in
D	on
E	None of the above
Correct Answer	E
Marks	1

Question Description	Choose the correct alternative: We went _____ a movie in the evening.
A	for
B	to
C	at
D	onto
E	None of the above
Correct Answer	B
Marks	1

Question Description	Choose the alternative which can substitute the phrase given below: “Make something less in size”
A	palliation
B	reduction
C	aggravation
D	medication
E	None of the above
Correct Answer	B
Marks	1

Question Description	Choose the most appropriate one-word substitution for the given description: The study of languages.
A	Biology
B	Anthropology
C	Ornithology
D	Philology
E	None of the above
Correct Answer	D
Marks	1

Question Description	Complete the Proverb : Even _____ sometimes nods
A	they
B	Homer
C	Pope
D	Milton
E	None of the above
Correct Answer	B
Marks	1

Question Description

Complete the Proverb :

Familiarity breeds _____

A

Familiarity

B

bonding

C

contempt

D

friendship

E

None of the above

Correct Answer

C

Marks

1

Question Description	Select the correct meaning of the Foreign language phrase/word given : Inter alia
A	Interested in alliance
B	Alliance invited
C	Among other things
D	All of the above
E	None of the above
Correct Answer	C
Marks	1

Question Description	The word nearest in meaning to the word “ scope ” is ____ .
A	limit
B	range
C	opportunity
D	outlet
E	None of the above
Correct Answer	B
Marks	1

Question Description	Choose an alternative which expresses the meaning of the given proverb: A stumble may prevent a fall.
A	Pride always brings trouble.
B	Without trouble or suffering, no success or glory is possible.
C	What is true is effective in itself.
D	Much may come of little.
E	None of the above
Correct Answer	E
Marks	1

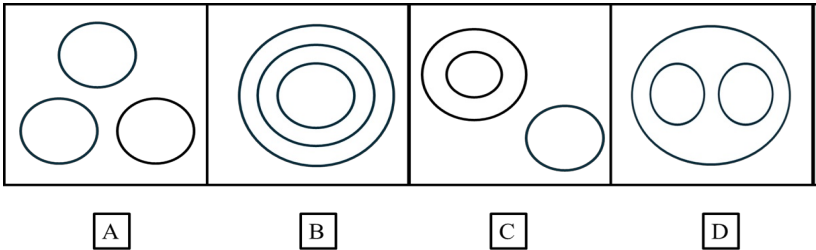
Question Description	Select the option that is opposite in meaning to the underlined word : The young leader was <u>reluctant</u> to shoulder the responsibilities of the ministerial office.
A	Wanting
B	Willing
C	Anxious
D	Eager
E	None of the above
Correct Answer	B
Marks	1

Question Description	Choose the correct alternative: I generally _____ books when I visit the book fair.
A	bought
B	will buy
C	buy
D	bring
E	None of the above
Correct Answer	C
Marks	1

Question Description	Choose the correct alternative from those to rephrase the sentence from Direct to Indirect Speech. “Can you help me to do this History homework?” asked Ranjita.
A	Can you help me to do this History homework? asked Ranjita.
B	Ranjita asked if I could help her to do that History homework.
C	Ranjita questioned whether she could be helped in doing that History homework.
D	This History homework has to be done, can someone help me?
E	None of the above
Correct Answer	B
Marks	1

Question Description

Select the diagram which best illustrates the relationship between myopia, ocular disease and heart attack.



A

A

B

B

C

C

D

D

E

None of the above

Correct Answer

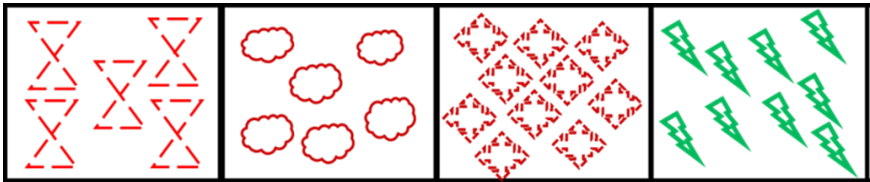

C

Marks

1

Question Description

Identify the figure that completes the pattern.



A

B

C

D

A

A

B

B

C

C

D

D

E

None of the above

Correct Answer

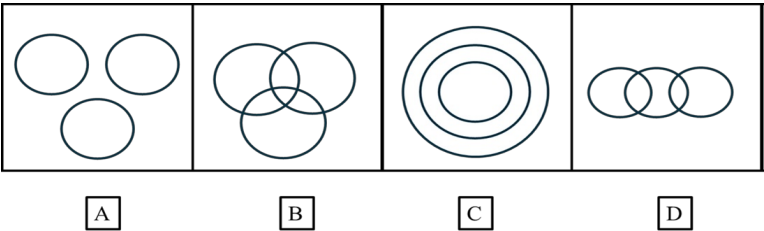
C

Marks

1

Question Description

Select the diagram which best illustrates the relationship between wood, brick and stone.



A

A

B

B

C

C

D

D

E

None of the above

Correct Answer

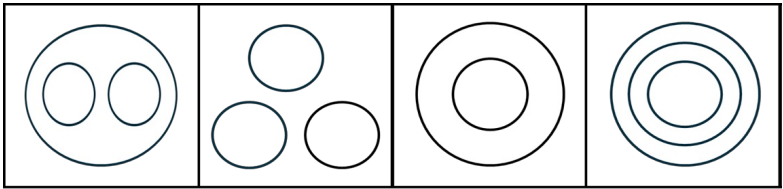
A

Marks

1

Question Description

Select the diagram which best illustrates the relationship between a tiger, cheetah, and carnivore.



A

B

C

D

A

A

B

B

C

C

D

D

E

None of the above

Correct Answer

A

Marks

1

Question Description

Choose the set of figures that follow the rule given below

Rule: Closed Figures become more and more open.

A

B

C

D

A

A

B

B

C

C

D

D

E

None of the above

Correct Answer

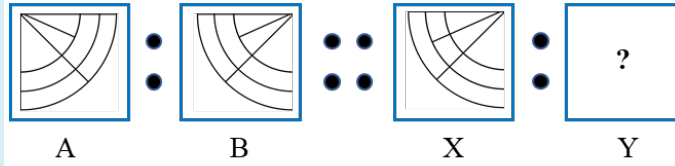
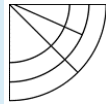
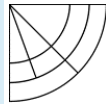
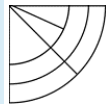
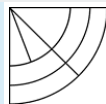
B

Marks

1

Question Description

Figure in box X is related to figure in box Y in the same way as figure in box A is related to figure in box B. Which of the following figure should be in box Y?

**A****B****C****D****E**

None of the above

Correct Answer

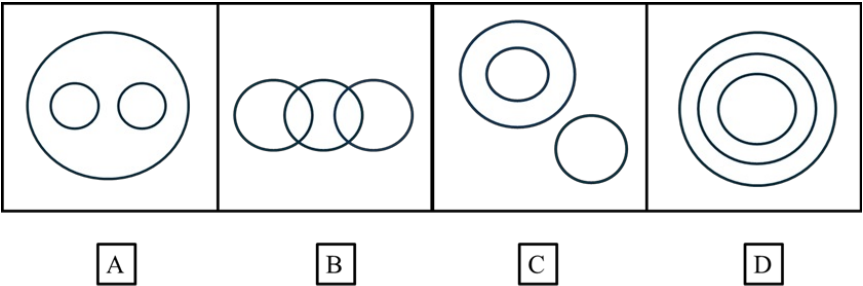
A

Marks

1

Question Description

Select the diagram which best illustrates the relationship between candle, wax and matchstick.



A

A

B

B

C

C

D

D

E

None of the above

Correct Answer

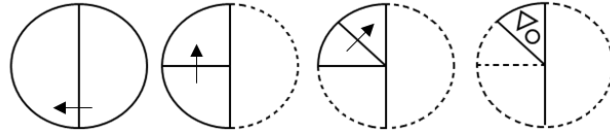
C

Marks

1

Question Description

A sequence of folding a piece of paper and the manner in which the folded paper has been cut is shown in the following figures.

**A****B****C****D****E**

None of the above

Correct Answer

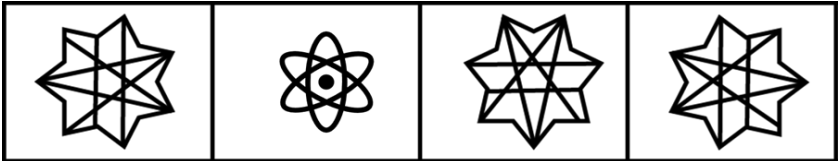
B

Marks

1

Question Description

Find the correct option for the ‘Water Image’ of the following object.



A

B

C

D

A

A

B

B

C

C

D

D

E

None of the above

Correct Answer

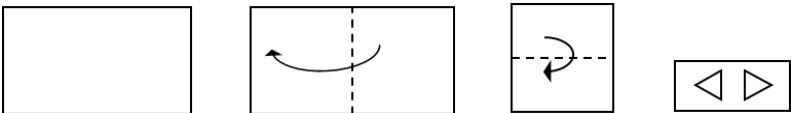
C

Marks

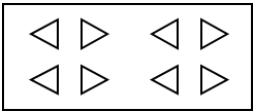
1

Question Description

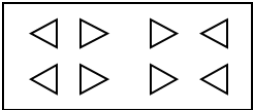
A sequence of folding a piece of paper and the manner in which the folded paper has been cut is shown in the following figures. How would this paper look when unfolded?



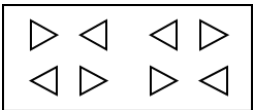
A



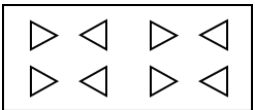
B



C



D



E

None of the above

Correct Answer

A

Marks

1

Question Description	A can do a piece of work in 24 days. If B is 60% more efficient than A, then the number of days required by B to do twice as large as earlier work is
A	24
B	36
C	15
D	30
E	None of the above
Correct Answer	D
Marks	1

Question Description	The shadow of a tower standing on a level ground is found to be 40m longer when the sun's altitude is 30° than when it was 60° . Find the height of the tower.
A	33.64m
B	34.64m
C	30.64m
D	29.64m
E	None of the above
Correct Answer	B
Marks	1

Question Description	A train travels 180 Kms in 2 hours with a certain speed. How many kilometers it will travel in 7 hours with the same speed?
A	360
B	480
C	500
D	630
E	None of the above
Correct Answer	D
Marks	1

Question Description	0.87 is equal to _____
A	8.7 %
B	0.87 %
C	87 %
D	0.087 %
E	None of the above
Correct Answer	C
Marks	1

Question Description	If the $\frac{2}{7}$ part of a certain sum is donated and $\frac{1}{4}$ part was spent on education then the balance amount will be:
A	$\frac{14}{28}$
B	$\frac{13}{28}$
C	$\frac{11}{28}$
D	$\frac{5}{28}$
E	None of the above
Correct Answer	B
Marks	1

Question Description

The table below shows the salaries of 280 persons

Salary (In thousands)	No. of persons
5 - 10	49
10 - 15	133
15 - 20	63
20 - 25	15
25 - 30	6
30 - 35	7
35 - 40	4
40 - 45	2
45 - 50	1

Calculate the median of the data

A

14.1

B

13.14

C

13.42

D

12.42

E

None of the above

Correct Answer

C

Marks

1

Question Description	Roma had 584 red, 287 blue, 846 green marbles. The total number of marbles possessed by Roma are -----.
A	1772
B	1177
C	1717
D	1727
E	None of the above
Correct Answer	C
Marks	1

Question Description	The value of $5 \times 8 + 32 \div 8$ is -----.
A	9
B	15
C	37
D	44
E	None of the above
Correct Answer	D
Marks	1

Question Description	$(5 \times 15) - (3 \times 25) + 150 = \underline{\hspace{2cm}}$.
----------------------	--

A	0
---	---

B	300
---	-----

C	150
---	-----

D	75
---	----

E	None of the above
---	-------------------

Correct Answer	C
----------------	---

Marks	1
-------	---

Question Description	Rohan scored 644 marks out of 700 in the final exam. What is his percentage for the exam?
----------------------	---

A	92%
---	-----

B	64.4%
---	-------

C	85.7%
---	-------

D	70%
---	-----

E	None of the above
---	-------------------

Correct Answer	A
----------------	---

Marks	1
-------	---

Question Description	Find odd one out from the following options
A	Parallelogram: 4
B	Pentagon: 5
C	Triangle: 3
D	Rectangle: 2
E	None of the above
Correct Answer	D
Marks	1

Question Description	In a certain language, if TIGER is coded as VLIHT then how will WORLD be coded?
A	YRSOF
B	YRTOF
C	ZRTOF
D	ZRSOG
E	None of the above
Correct Answer	B
Marks	1

Question Description	The position of how many letters in the word “ HANDLE ” remain unchanged when they are arranged in the alphabetical order?
A	Nil
B	One
C	Two
D	Three
E	None of the above
Correct Answer	B
Marks	1

Question Description	Which number is wrongly placed in the following number series. 4, 9, 18, 25, 36
A	4
B	9
C	18
D	25
E	None of the above
Correct Answer	C
Marks	1

Question Description	<p>Study the following arrangement carefully and answer the question carefully.</p> <p>D \$ B F 4 6 & * 9 G K L # @ Z C % J N P</p> <p>Which of the following elements would be 4th to the right of 8th from the right end?</p>
A	C
B	Z
C	J
D	%
E	None of the above
Correct Answer	D
Marks	1

Question Description	<p>Complete the series.</p> <p>AZ, CX, FU, ?</p>
A	IR
B	IV
C	JQ
D	KP
E	None of the above
Correct Answer	C
Marks	1

Question Description	P, Q, R, S, and T are standing in a line. Q is standing immediately to the left of R while S is not standing adjacent to R. T is standing at the right most end of the row. If there is only one person standing between R and T then who is standing in the middle of the row?
A	P
B	Q
C	S
D	T
E	None of the above
Correct Answer	E
Marks	1

Question Description	<p>Read the following information carefully and answer the question given below:</p> <p>‘A + B’ means ‘A is the husband of B’</p> <p>‘A ⇒ B’ means ‘A is the wife of B’</p> <p>‘A ↔ B’ means ‘A is the son of B’</p> <p>If $Y \leftrightarrow H \Rightarrow D$ then how is D related to Y?</p>
A	Mother
B	Sister
C	Brother
D	Father
E	None of the above
Correct Answer	D
Marks	1

Question Description	<p>The question below has two statements, I and II. These statements may be either independent causes or may be effects of independent causes or a common cause. One of these statements may be the effect of the other statements. Read both the statements and decide which of the following answer choice correctly depicts the relationship between these two statements.</p> <p>Statements:</p> <p>I. Loss of habitat leads to decreased biodiversity and ecosystem imbalance.</p> <p>II. Urbanization and industrialization leads to deforestation.</p>
A	Statement I is the cause and statement II is the effect.
B	Statement II is the cause and Statement I is the effect.
C	Statement I and II are effects of independent causes.
D	Statement I and II are independent effects of some common cause.
E	None of the above
Correct Answer	B
Marks	1

Question Description	Statement I: Some credit society announced decrease in the rate of interest. Statement II: Number of people taking loan has increased as compared to past.
A	Statement I is the cause and Statement II is its effect
B	Statement II is the cause and Statement I is the effect
C	Both statement I and Statement II are independent causes.
D	Both Statement I and Statement II are effect of some common cause
E	None of the above
Correct Answer	A
Marks	1