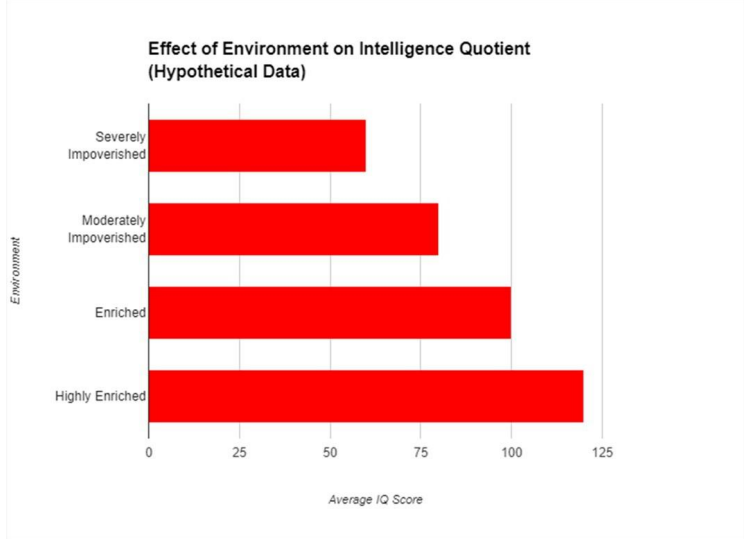
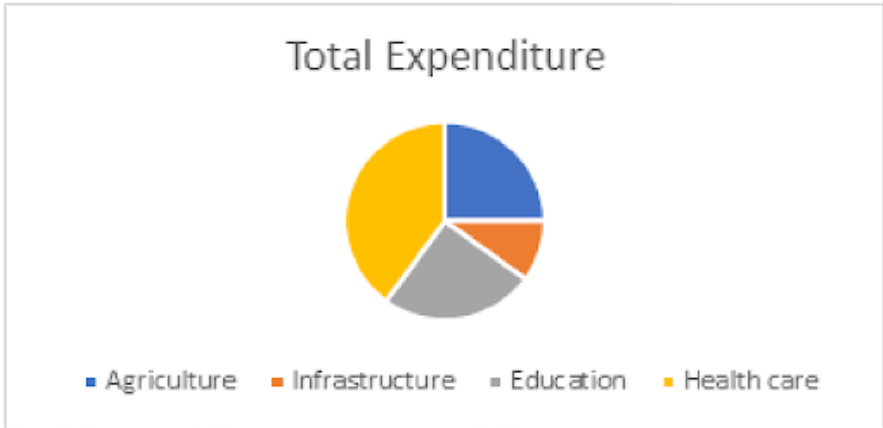



| SUPPLEMENTARY TO THE PROVISIONAL RESULT - JUNIOR STENOGRAPHER | | | | | | | | | | | |
|---|---|-------------|---------------------|-----------------------|----|-------------------------|----|-----------|-----|-----------------|-----|
| Provisional Result of the CBT held on 25th May, 2025 for the post of Junior Stenographer | | | | | | | | | | | |
| Note : The following questions were not displayed properly in the provisional result published on 26/05/2025. Further, the answer key of second question is revised since there was typographical error. | | | | | | | | | | | |
| Question | With the help of the graph, answer the following questions | | | | | | | | | | |
| |  <table border="1"> <caption>Effect of Environment on Intelligence Quotient (Hypothetical Data)</caption> <thead> <tr> <th>Environment</th> <th>Average IQ Score</th> </tr> </thead> <tbody> <tr> <td>Severely Impoverished</td> <td>60</td> </tr> <tr> <td>Moderately Impoverished</td> <td>80</td> </tr> <tr> <td>Enriched</td> <td>100</td> </tr> <tr> <td>Highly Enriched</td> <td>115</td> </tr> </tbody> </table> | Environment | Average IQ Score | Severely Impoverished | 60 | Moderately Impoverished | 80 | Enriched | 100 | Highly Enriched | 115 |
| Environment | Average IQ Score | | | | | | | | | | |
| Severely Impoverished | 60 | | | | | | | | | | |
| Moderately Impoverished | 80 | | | | | | | | | | |
| Enriched | 100 | | | | | | | | | | |
| Highly Enriched | 115 | | | | | | | | | | |
| Sub Question | What is the difference in average IQ score (range) between the enriched and severely impoverished environments? | | | | | | | | | | |
| A | 10-25 points | | | | | | | | | | |
| B | 20-30 points | | | | | | | | | | |
| C | 30 -50 points | | | | | | | | | | |
| D | 80-105 points | | | | | | | | | | |
| E | None of the above | | | | | | | | | | |
| Answer | C | | | | | | | | | | |
| Marks | +1 for all candidates | | | | | | | | | | |
| Question | Answer the Following questions using the Pie chart which represents the annual budget of a state in the year 2021 with the Total expenditure of Rs. 100 Crores. | | | | | | | | | | |
| |  <table border="1"> <caption>Total Expenditure</caption> <thead> <tr> <th>Category</th> <th>Amount (Rs. Crores)</th> </tr> </thead> <tbody> <tr> <td>Agriculture</td> <td>25</td> </tr> <tr> <td>Infrastructure</td> <td>15</td> </tr> <tr> <td>Education</td> <td>40</td> </tr> <tr> <td>Health care</td> <td>20</td> </tr> </tbody> </table> | Category | Amount (Rs. Crores) | Agriculture | 25 | Infrastructure | 15 | Education | 40 | Health care | 20 |
| Category | Amount (Rs. Crores) | | | | | | | | | | |
| Agriculture | 25 | | | | | | | | | | |
| Infrastructure | 15 | | | | | | | | | | |
| Education | 40 | | | | | | | | | | |
| Health care | 20 | | | | | | | | | | |
| Sub Question | On which two items govt. has spent same amount? | | | | | | | | | | |
| A | Agriculture and infrastructure | | | | | | | | | | |
| B | Education and Healthcare | | | | | | | | | | |
| C | Education and Agriculture | | | | | | | | | | |

| D | Infrastructure and Agriculture | | | | | | | | | | | | |
|--------------|--|---------------------------|---------------------|---------------------------|-------------|----|----|-------------|----|----|-------------|----|----|
| E | None of the above | | | | | | | | | | | | |
| Answer | C | | | | | | | | | | | | |
| Marks | +1 for all candidates | | | | | | | | | | | | |
| | | | | | | | | | | | | | |
| Question | With the help of the graph, answer the following question. | | | | | | | | | | | | |
| | <div><p>Work Stress and Work-Life Balance by Work Style</p><table border="1"><thead><tr><th>Work Style</th><th>Work Stress (Score)</th><th>Work-Life Balance (Score)</th></tr></thead><tbody><tr><td>Remote work</td><td>35</td><td>70</td></tr><tr><td>Hybrid work</td><td>28</td><td>75</td></tr><tr><td>Office work</td><td>20</td><td>85</td></tr></tbody></table></div> | Work Style | Work Stress (Score) | Work-Life Balance (Score) | Remote work | 35 | 70 | Hybrid work | 28 | 75 | Office work | 20 | 85 |
| Work Style | Work Stress (Score) | Work-Life Balance (Score) | | | | | | | | | | | |
| Remote work | 35 | 70 | | | | | | | | | | | |
| Hybrid work | 28 | 75 | | | | | | | | | | | |
| Office work | 20 | 85 | | | | | | | | | | | |
| Sub Question | The graph suggests that employees who work in an office environment tend to have_____. | | | | | | | | | | | | |
| A | Higher stress and worse work-life balance than remote workers | | | | | | | | | | | | |
| B | Similar stress levels but better work-life balance than remote workers | | | | | | | | | | | | |
| C | Lower stress and better work-life balance than remote workers | | | | | | | | | | | | |
| D | The graph does not provide enough information to determine this | | | | | | | | | | | | |
| E | None of the above | | | | | | | | | | | | |
| Answer | C | | | | | | | | | | | | |
| Marks | +1 for all candidates | | | | | | | | | | | | |