



Goa Staff Selection Commission

6th Floor, 3rd Lift, SPACES Building, Patto Plaza, Panaji-Goa – 403001.

COMPUTER BASED TEST

Post Name : Librarian Grade-II

1

Question Description *	मंडप ह्या उतराक समान अर्थ आशिल्लें उतर खंयचें ?
A *	माडी
B *	मोडवो
C *	मोटार
D *	माटोव
E *	None of the above
Marks *	1
Answer *	d

2

Question Description *	लाकडां- भोरो, पन्नावळी-पेळो, फुलां-तुरो जाल्यार पापडांची
A *	जोडी
B *	माळ
C *	कवळी
D *	सरपळी
E *	None of the above
Marks *	1
Answer *	c

3

Question Description *	गोसाळयाची वात, दुदयाचो तोरो, पेरीचो धोडो जाल्यार तवश्याची
A *	पिपरी
B *	कोमरी
C *	कळी
D *	बोंगो
E *	None of the above
Marks *	1
Answer *	a

4

Question Description *	दोन उतरां एकठांय जावन जाल्ल्या ह्या समासांतली खंयची जोडी सारखी ना.
A *	तांबडोगुंज
B *	पांचवोफार
C *	धवोफुल्ल
D *	काळोकिट्ट
E *	None of the above
Marks *	1
Answer *	b

5

Question Description *	कोलो ह्या एकवचनाचे भोववचन कोले जाता, जाल्यार दुदी ह्या एकवचनाचे भोववचन जाता.
A *	दुदकें
B *	दुदी
C *	दुदे
D *	दूद
E *	None of the above
Marks *	1
Answer *	b

6

Question Description *	पुतालो पूत तो नातू आनी नातवालो पुत तो
A *	आजो
B *	पणतू
C *	पणजो
D *	शेणजो
E *	None of the above
Marks *	1
Answer *	b

7

Question Description *	ओपार पुराय करात. सुंगटां दिवचीं पुण दाखोवची न्हय
A *	रांदन
B *	आदोळी
C *	गरी
D *	पोंय
E *	None of the above
Marks *	1
Answer *	d

8

Question Description *	माडार चडून 'सूर' काडटा तो
A *	भाटकार
B *	मुंडकार
C *	पाडेली
D *	रेंदेर
E *	None of the above
Marks *	1
Answer *	d

9

Question Description *	तिणे आदोळेचेर नुस्ते उजरायले, भाजी शिंदली, आमाडे तासले आनी नाल्लाची सोय
A *	कापली
B *	कातली
C *	विरली
D *	कांडली
E *	None of the above
Marks *	1
Answer *	b

10

Question Description *	ओपार पुराय करात 'शेणिल्लें गोरुं करमळेच्या
A *	गोट्यांत
B *	तळ्यांत
C *	मळार
D *	वंयेंत
E *	None of the above
Marks *	1
Answer *	b

11

Question Description *	ABCD form a sentence. Identify the part of the sentence that has an error. If there is no error select E.
A *	Nayna
B *	is having
C *	four
D *	children
E *	None of the above
Marks *	1
Answer *	b

12

Question Description *	<p>Given below are 4 parts of a sentence. Rearrange the parts to form a meaningful sentence.</p> <p>A. Although the fall of the Roman Empire B) To influence Western thought C) Latin continued D) Took place in the 5th century</p>
A *	ADCB
B *	BACD
C *	DBCA
D *	CBAD
E *	None of the above
Marks *	1
Answer *	a

13

Question Description *	Choose the alternative that is opposite in meaning to the underlined word: The security guard needs to be more <u>vigilant</u> at night.
A *	loud
B *	innocent
C *	careful
D *	cautious
E *	None of the above
Marks *	1
Answer *	e

14

Question Description *	Choose the correct alternative: It seems that their event was a huge success if you _____by the social media poll.
A *	follow
B *	see
C *	plan
D *	go
E *	None of the above
Marks *	1
Answer *	d

15

Question Description *	Given below are 4 parts of a sentence. Rearrange the parts to form a meaningful sentence. A. The most important essential B) Money is C) Of civilisation D) Properly used
A *	CBAD
B *	ADBC
C *	DBAC
D *	BDAC
E *	None of the above
Marks *	1
Answer *	c

16

Question Description *	ABCD form a sentence. Identify the part of the sentence that has an error. If there is no error select E.
A *	This outfit
B *	looks
C *	lose
D *	on you
E *	None of the above
Marks *	1
Answer *	c

17

Question Description *	Choose the correct one-word substitute for the underlined phrase: This hand sewing machine <u>can easily be carried anywhere</u> .
A *	Cartable
B *	Portable
C *	Potable
D *	Relatable
E *	None of the above
Marks *	1
Answer *	b

18

Question Description *	ABCD form a sentence. Identify the part of the sentence that has an error. If there is no error select E.
A *	The village
B *	was completely
C *	wiped
D *	in the Tsunami
E *	None of the above
Marks *	1
Answer *	c

19

Question Description *	Choose the correct alternative: You'll be there, _____
A *	Will you?
B *	Would you?
C *	Won't you?
D *	Isn't it?
E *	None of the above
Marks *	1
Answer *	c

20

Question Description *	Choose the alternative that is opposite in meaning to the underlined word: The court declared him <u>innocent</u> .
A *	free
B *	guilty
C *	wicked
D *	illegal
E *	None of the above
Marks *	1
Answer *	b

21

Question Description *	The sum of the ages of 5 children born at the intervals of 3 years each is 50 years. What will be the age of youngest child?
A *	4 years
B *	8 years
C *	10 years
D *	12 years
E *	None of the above
Marks *	1
Answer *	a

22

Question Description *	The sum of first 5 whole numbers is -----
A *	25
B *	28
C *	15
D *	10
E *	None of the above
Marks *	1
Answer *	d

23

Question Description *	$569.32 \div 100 = \text{-----}$
A *	56.932
B *	5.6932
C *	0.56932
D *	0.056932
E *	None of the above
Marks *	1
Answer *	b

24

Question Description *	The smallest odd prime number is -----
A *	3
B *	4
C *	1
D *	2
E *	None of the above
Marks *	1
Answer *	a

25

Question Description *	The sum of predecessor of 1000 and successor of 99999 is -----.
A *	100999
B *	10999
C *	19909
D *	100099
E *	None of the above
Marks *	1
Answer *	a

26

Question Description *	Using the digits 2,5,8,4 only once,the greatest 4 digit number with 2 at its ten's place is -----
A *	8542
B *	8524
C *	5428
D *	4528
E *	None of the above
Marks *	1
Answer *	b

27

Question Description *	From Margao to Udupi,one full ticket railway fare is Rs.520 and reservation charges is Rs.50 which is same for full as well as half ticket.The total fare for 2 full reserved and 3 half reserved ticket will be Rs.-----
A *	2070
B *	1820
C *	1995
D *	1920
E *	None of the above
Marks *	1
Answer *	a

28

Question Description *	If $a + b + c = 9$ and $ab + bc + ca = 23$, then $a^2 + b^2 + c^2 = \underline{\hspace{2cm}}$
A *	35
B *	58
C *	127
D *	235
E *	None of the above
Marks *	1
Answer *	a

29

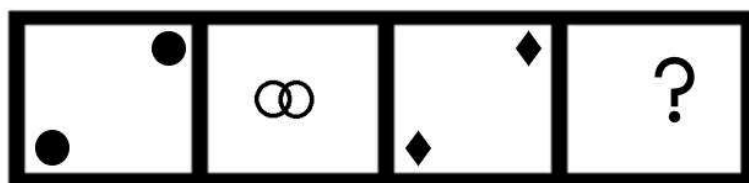
Question Description *	Ages of Nisha and her sister are in the ratio 3:2 and the sum of their ages is 60 years .Therefore Nisha's age is ----- years.
A *	36
B *	24
C *	30
D *	20
E *	None of the above
Marks *	1
Answer *	a

30

Question Description *	A car can cover a distance of 24 km in 1 litre of petrol.How much distance it will cover in 3.5 litres of petrol?
A *	72 km
B *	25km
C *	84 km
D *	48km
E *	None of the above
Marks *	1
Answer *	c

Question Description *

Select a suitable figure from the answer figures numbered 1, 2, 3 and 4 that would replace the question mark (?).

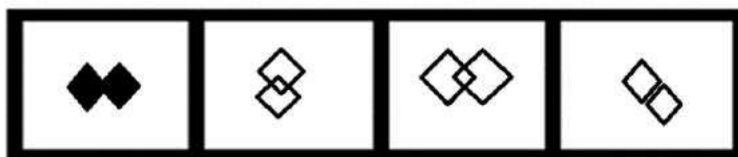


a

b

c

d



1

2

3

4

A *

1

B *

2

C *

3

D *

4

E *

None of the above

Marks *

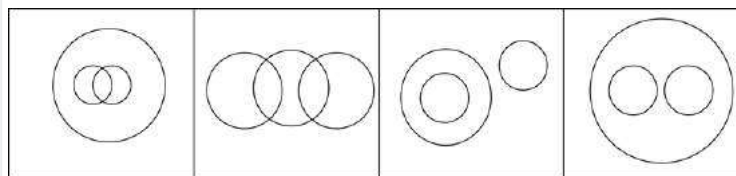
1

Answer *

c

Question Description *

Which of the following options correctly represents the relationship between doctor, men and women?



A

B

C

D

A *

A

B *

B

C *

C

D *

D

E *

None of the above

Marks *

1

Answer *



b

33


Question Description *	Choose the option that resembles the water image of the number 7089?
A *	7089
B *	∟08∩
C *	Ɔ80∟
D *	680∟
E *	None of the above
Marks *	1
Answer *	b

Question Description *


If the question figure given below is rotated by 90 degrees in clockwise direction, then what will be the next figure?



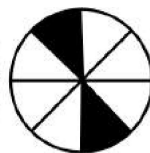
1



2



3



4

A *

1

B *

2

C *

3

D *

4

E *

None of the above

Marks *

1

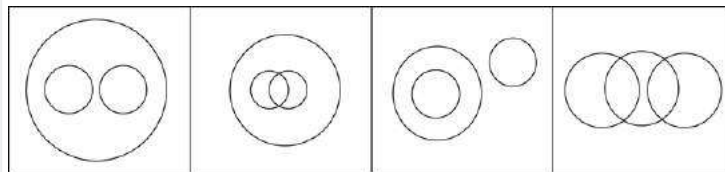
Answer *

a

35

Question Description *

Which of the following correctly represents the relationship between Books, Novels and Journals?



A

B

C

D

A *

A

B *

B

C *

C

D *

D

E *

None of the above

Marks *

1

Answer *

a

36

Question Description *

If the code of BOMBAY was 251214252602, then the code for MUMBAI would be ?

A *

190824261716

B *

140614252618

C *

250612142602

D *

251214262502

E *

None of the above

Marks *

1

Answer *

b

37

Question Description *	What is the product of all numbers in the dial of a telephone?
A *	159480
B *	159450
C *	158480
D *	158450
E *	None of the above
Marks *	1
Answer *	e

38

Question Description *	In the code language, SUN is written as 434533, and MOON is written as 32343433. How is GALAXY written in the same code language?
A *	223321311153
B *	221131115354
C *	221131115453
D *	221131113154
E *	None of the above
Marks *	1
Answer *	b

39

Question Description *	If 5 th of a month is Monday, then find out the 5 th day before 28 th of that month.
A *	Monday
B *	Wednesday
C *	Friday
D *	Sunday
E *	None of the above
Marks *	1
Answer *	c

40

Question Description *	From the given options select one word that can be formed using letters from the word “PRESENT”.
A *	Resident
B *	Prefer
C *	Part
D *	Enter
E *	None of the above
Marks *	1
Answer *	d

41

Question Description *	What type is a Classified catalogue ?
A *	Title catalogue
B *	Name catalogue
C *	Author catalogue
D *	Subject catalogue
E *	None of the above
Marks *	1
Answer *	d

42

Question Description *	The component of a computer system that controls the interpretation and execution of instructions is called
A *	Program
B *	Monitor
C *	Command
D *	Printer
E *	None of the above
Marks *	1
Answer *	e

43

Question Description *	GOC is used in libraries in determining:
A *	Purchase of books
B *	Foreign Exchange Rates
C *	Foreign agency
D *	Discount Rates
E *	None of the above
Marks *	1
Answer *	b

44

Question Description *	Which one of the following is a search engine
A *	Google Chrome
B *	Mozilla Firefox
C *	Internet Explorer
D *	Opera
E *	None of the above
Marks *	1
Answer *	e

45

Question Description *	Principle of 'Osmosis' is concerned with?
A *	Stock Taking
B *	Classification
C *	Reclassification
D *	Preservation
E *	None of the above
Marks *	1
Answer *	b

46

Question Description *	What is the Full form of PERT
A *	Programme evaluation and revival technique
B *	Programming expert revision technique
C *	Planning evaluation and reporting technique
D *	Programme evaluation and review technique
E *	None of the above
Marks *	1
Answer *	d

47

Question Description *	What is 'Thesaurus'
A *	A collection of selected terminology
B *	Synonymous terms
C *	List of words
D *	All of the above
E *	None of the above
Marks *	1
Answer *	d

48

Question Description *	Who describes the Library as a public institution charged with the collection of books to make these accessible for users?
A *	Melvil Dewey
B *	A.P.J. Abdul Kalam
C *	E.J. Coates
D *	S.R. Ranganathan
E *	None of the above
Marks *	1
Answer *	d

49

Question Description *	Among the following, which is the oldest Library in India
A *	Asiatic Society Library, Bombay
B *	Connemara Public Library, Madras
C *	Delhi Public Library, Delhi
D *	National Library of India, Calcutta
E *	None of the above
Marks *	1
Answer *	d

50

Question Description *	Which department sends reminders to users for returning Library books?
A *	Acquisition Section
B *	Processing Department
C *	Reference Department
D *	Circulation Department
E *	None of the above
Marks *	1
Answer *	d

51

Question Description *	A photocopying service of pages from books or journals available to users in a Library is called service
A *	Responsive
B *	Reprographic
C *	Lending
D *	Anticipatory
E *	None of the above
Marks *	1
Answer *	b

52

Question Description *	Process of reading data from permanent store and writing it to computer's main store is called :
A *	Saving data
B *	Loading data
C *	Writing data
D *	Reading data
E *	None of the above
Marks *	1
Answer *	b

53

Question Description *	As per Indian Copyright Law, copyright for literary work is granted for
A *	Fifty years after the book is published
B *	Fifty years after the death of the author
C *	Sixty years after the book is published
D *	sixty years after the death of the author
E *	None of the above
Marks *	1
Answer *	d

54

Question Description *	Krishnadas Shama Goa State Central Libraryat Panaji was established on.....
A *	15 th August 1832
B *	15 th September 1832
C *	15 th October 1832
D *	15 th November 1832
E *	None of the above
Marks *	1
Answer *	b

55

Question Description *	When was RRRLF established?
A *	1970
B *	1971
C *	1972
D *	1973
E *	None of the above
Marks *	1
Answer *	c

56

Question Description *	Which part of Encyclopaedia Britannica is useful for ready references?
A *	Macropaedia
B *	Propaedia
C *	Micropaedia
D *	Premedia
E *	None of the above
Marks *	1
Answer *	b

57

Question Description *	The smallest unit of data in a database is:
A *	Record
B *	File
C *	Field
D *	Table
E *	None of the above
Marks *	1
Answer *	c

58

Question Description *	What is the basis for the formation of Cutter Book Number?
A *	Name of the author
B *	Year of Publication
C *	ISBN
D *	Book Number
E *	None of the above
Marks *	1
Answer *	a

59

Question Description *	The Dewey Decimal Classification(DDC) divides human knowledge into
A *	100 basic categories
B *	09 basic categories
C *	90 basic categories
D *	99 basic categories
E *	None of the above
Marks *	1
Answer *	e

60

Question Description *	RFID technology is used in:
A *	Acquisition
B *	Serial Control
C *	Circulation Control
D *	OPAC
E *	None of the above
Marks *	1
Answer *	c