



## Goa Staff Selection Commission

6th Floor, 3rd Lift, SPACES Building, Patto Plaza, Panaji-Goa – 403001.

### COMPUTER BASED TEST

**Post Name : Librarian Grade -I**

1

Question Description *	ओषार पुराय करात 'शेणिल्लें गोरुं करमळेच्या .....
A *	गोठ्यांत
B *	तळ्यांत
C *	मळार
D *	वंयेंत
E *	None of the above
Marks *	1
Answer *	b

2

Question Description *	‘तो वर्सभर बरो शिकलो म्हणून पयलो आयलो.’ ह्या वाक्यांत आमकां किदें दिसता ?
A *	परिणाम
B *	प्रश्न
C *	अज्ञाप
D *	भिरांत
E *	None of the above
Marks *	1
Answer *	a

3

Question Description *	एका कोंकणी लोक गीतांत ‘कुरु कुरु काना आनी म्हशी गेल्यो .....
A *	पाणयां
B *	चरवा
C *	रानां
D *	गोट्यां
E *	None of the above
Marks *	1
Answer *	c

4

Question Description *	‘काजू’ ह्या फळाकडेन खंयच्या उतराचो संबंध येना.
A *	म्हुट्टो
B *	कांकाडी
C *	तुरमण
D *	पिपरी
E *	None of the above
Marks *	1
Answer *	d

5

Question Description *	कवचेचीं कांकणा घेवन येता तो वळार आनी मातयेचीं मडकीं घेवन येता तो .....
A *	कांसार
B *	कुंभार
C *	मेस्त
D *	गंवणो
E *	None of the above
Marks *	1
Answer *	b

6

Question Description *	दुकान वा मांड ह्या उतराक कोंकणीत आनी खंयचें उतर वापरतात
A *	भेकरो
B *	कातरो
C *	भितरो
D *	पसरो
E *	None of the above
Marks *	1
Answer *	d

7

Question Description *	'देव तुमचें बरें करतलो' ह्या वाक्यांत जो क्रियापदाचो काळ आयला, तो .....
A *	वर्तमानकाळ
B *	भूतकाळ
C *	भविश्यकाळ
D *	चालंतकाळ
E *	None of the above
Marks *	1
Answer *	c

8

Question Description *	दोन उतरां एकठांय जावन जाल्ल्या ह्या समासांतली खंयची जोडी सारखी ना.
A *	तांबडोगुंज
B *	पांचवोफार
C *	धवोफुल्ल
D *	काळोकिट्ट
E *	None of the above
Marks *	1
Answer *	b

9

Question Description *	‘ताणे भूरगेपणात खूब मस्ती केल्या’ हाचोच अर्थ, तो ‘ ..... ’ आसताना मस्तीखोर आसलो.
A *	जाणटो
B *	तरणो
C *	जुवान
D *	भूरगो
E *	None of the above
Marks *	1
Answer *	d

10

Question Description *	भाचो-भाची, नातू-नात जाल्यार पूत- .... ?
A *	धूव
B *	पत्रिका
C *	पूतणयी
D *	कुंव
E *	None of the above
Marks *	1
Answer *	a

11

Question Description *	Choose the alternative that best expresses the meaning of the underlined word: We cancelled our trip on account of the <u>incessant</u> rain.
A *	heavy
B *	sudden
C *	constant
D *	intermittent
E *	None of the above
Marks *	1
Answer *	c

12

Question Description *	Choose the alternative that best expresses the meaning of the underlined word: This old house has become a <u>rendezvous</u> for undesirable elements.
A *	public place
B *	meeting place
C *	hiding place
D *	gambling place
E *	None of the above
Marks *	1
Answer *	b

13

Question Description *	Identify the correctly spelled word from the options below:
A *	accomadation
B *	accommodation
C *	accomodation
D *	accommadation
E *	None of the above
Marks *	1
Answer *	b

14

Question Description *	Identify the correctly spelled word from the options below:
A *	separate
B *	seperate
C *	seperete
D *	sepparate
E *	None of the above
Marks *	1
Answer *	a

15

Question Description *	Choose the correct alternative: Why should you be angry <u>        </u> me?
A *	at
B *	with
C *	on
D *	for
E *	None of the above
Marks *	1
Answer *	b

16

Question Description *	Choose the correct one-word substitute for the underlined phrase: Her son is a <u>                </u> . He lost his life in protecting the people of his country.
A *	Soldier
B *	Martyr
C *	Revolutionist
D *	Philanthropist
E *	None of the above
Marks *	1
Answer *	b

17

Question Description *	Identify the correctly spelled word from the options below:
A *	maintainance
B *	merrmaid
C *	acces
D *	judgement
E *	None of the above
Marks *	1
Answer *	d

18

Question Description *	Choose the correct alternative: He has _____ the meeting to next week.
A *	put up
B *	put off
C *	put on
D *	put away
E *	None of the above
Marks *	1
Answer *	b

19

Question Description *	Choose the correct alternative: I have been living in Goa _____ 1990.
A *	from
B *	since
C *	by
D *	about
E *	None of the above
Marks *	1
Answer *	b

20

Question Description *	Choose the correct alternative: He has _____ the meeting to next week.
A *	put up
B *	put off
C *	put on
D *	put away
E *	None of the above
Marks *	1
Answer *	b

21

Question Description *	How many days will 12 men take to complete a job, which 18 men take 36 days to finish?
A *	25 days
B *	54 days
C *	50 days
D *	24 days
E *	None of the above
Marks *	1
Answer *	b

22

Question Description *	What is 5% of 28% of 1500?
A *	15
B *	21
C *	28
D *	5
E *	None of the above
Marks *	1
Answer *	b



23

Question Description *	The ratio between the present ages of Sanju and Manju is 3:5 respectively. After 10 years, Sanju's age will be 58 years. What was Manju's age 6 years ago?
A *	16 years
B *	74 years
C *	48 years
D *	80 years
E *	None of the above
Marks *	1
Answer *	b

24

Question Description *	A rectangular field is 30 meters by 40 meters. What distance is saved by walking diagonally across the field?
A *	10 m.
B *	20 m.
C *	30 m.
D *	5 m.
E *	None of the above
Marks *	1
Answer *	b

25

Question Description *	'A' and 'B' can complete a piece of work in 8 and 16 days respectively. The work was allotted to 'B'. If 'B' leaves the work after 4 days, then how long would 'A' take to finish the remaining work?
A *	6 days
B *	8 days
C *	10 days
D *	12 days
E *	None of the above
Marks *	1
Answer *	a

26

Question Description *	What number when increased by 16% becomes 319?
A *	275
B *	300
C *	225
D *	280
E *	None of the above
Marks *	1
Answer *	a

27

Question Description *	If 36 workers can build a wall in 12 days, how many workers are required to build the same wall in 27 days?
A *	18
B *	17
C *	16
D *	15
E *	None of the above
Marks *	1
Answer *	c

28

Question Description *	A person spends 70% of his salary and saves Rs. 3174 per month. Find his monthly salary.
A *	Rs. 10,580
B *	Rs. 9,875
C *	Rs. 12,500
D *	Rs. 15,600
E *	None of the above
Marks *	1
Answer *	a

29

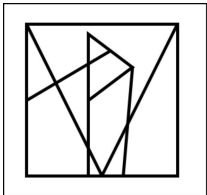
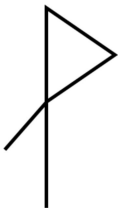
Question Description *	The cost of a book is Rs. 500 and its selling price is Rs. 620. Find the profit %.
A *	20%
B *	21%
C *	25%
D *	24%
E *	None of the above
Marks *	1
Answer *	d

30

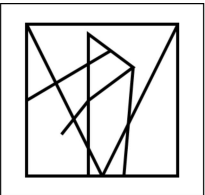
Question Description *	The sum of 4 consecutive integers is 462. Find the smallest integer.
A *	115
B *	114
C *	117
D *	118
E *	None of the above
Marks *	1
Answer *	b

Question Description \*

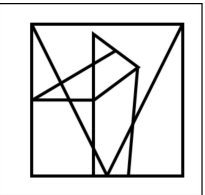
Which of the answer figure contains the question figure?



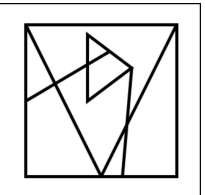
1



2



3



4

A \*

1

B \*

2

C \*

3

D \*

4

E \*

None of the above

Marks \*

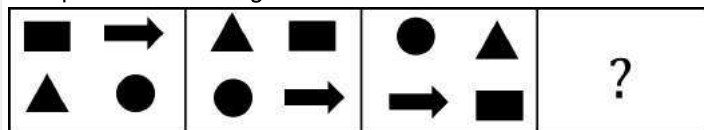
1

Answer \*

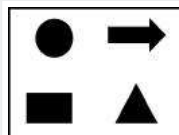
b

Question Description \*

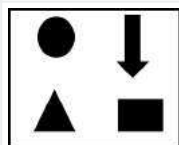
Complete the following series?



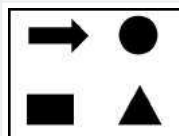
A \*



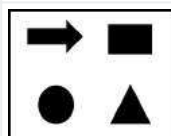
B \*



C \*



D \*



E \*

None of the above

Marks \*

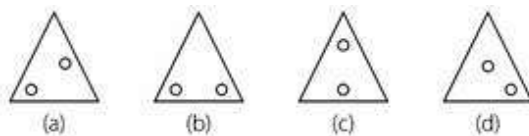
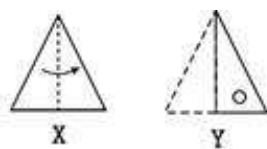
1

Answer \*

c

Question Description \*

Select the figure out from the answer figures labeled a, b, c and d showing the unfolded pattern after the cut.



A \*

a

B \*

b

C \*

c

D \*

d

E \*

None of the above

Marks \*


1

Answer \*

b

Question Description \*

Given below is set of figures that are numbered from 1 to 9. Classify the figures into 3 groups with similar properties and choose the correct option.



A \*

(1,5,9), (4,7,8), (2,6,3)

B \*

(1,2,6), (4,5,8), (3,7,9)

C \*

(1,4,7), (3,5,8), (3,6,9)

D \*

(1,2,3), (4,8,9), (5,6,7)

E \*

None of the above

Marks \*


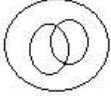
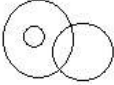
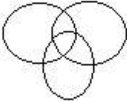
1

Answer \*

b



35

Question Description *	Which of the following diagrams indicates the best relation between Vegetables, Chillies and Grapes?
A *	
B *	
C *	
D *	
E *	None of the above
Marks *	1
Answer *	a

36

Question Description *	<p>How many visitors visited the Palace yesterday?</p> <p>Statements:</p> <p>I. Each entry pass can take upto 2 persons with him/her.</p> <p>II. In all, 250 passes were sold yesterday.</p>
A *	I alone is sufficient while II alone is not sufficient
B *	Either I or II is sufficient
C *	II alone is sufficient while I alone is not sufficient
D *	Neither I nor II is sufficient
E *	None of the above
Marks *	1
Answer *	d

37

Question Description *	<p>In the following question few statements are given and these statements are followed by conclusions. You have to take the given two statements to be true even if they seem to be at variance from commonly known facts. Read the conclusions and then decide which of the given conclusions logically follows from the given statements, disregarding commonly known facts.</p> <p><b>Statements:</b></p> <p>All bats are mats. No bat is a hat.</p>
A *	All hats are mats.
B *	Some hats are mats.
C *	All mats are bats.
D *	Some hats being mats are a possibility.
E *	None of the above
Marks *	1
Answer *	d

38

Question Description *	<p>In the following question few statements are given and these statements are followed by conclusions. You have to take the given two statements to be true even if they seem to be at variance from commonly known facts. Read the conclusions and then decide which of the given conclusions logically follows from the given statements, disregarding commonly known facts.</p> <p><b>Statements:</b></p> <p>Some hens are parrots. Some ducks are parrots.</p>
A *	Some hens are ducks.
B *	All ducks are parrots.
C *	Some hens are not ducks.
D *	All hens are ducks.
E *	None of the above
Marks *	1
Answer *	e

39

Question Description *	<p>In the question given below, there are two statements labeled Assertion (A) and Reason (R)</p> <p>Make your answer as per the codes given below.</p> <p><b>Assertion (A)</b> <i>A ship rises as it enters the sea from a river</i></p> <p><b>Reason (R)</b> <i>The density of seawater is higher as compared to river water</i></p>
A *	Both A and R are true and R is the correct explanation of A
B *	Both A and R are true but R is not the correct explanation of A
C *	A true but R is false
D *	A is false but R is true
E *	None of the above (Both A and R are false)
Marks *	1
Answer *	b

40

Question Description *	<p>Arrange the words in a meaningful sequence:</p> <p>1. Roofing 2. Site Preparation 3. Floor slab and foundation 4. Carpentry</p>
A *	4,1,2,3
B *	1,2,3,4
C *	4,1,3,2
D *	3,2,1,4
E *	None of the above
Marks *	1
Answer *	e

41

Question Description *	Which national agency in India is assigning the ISSN?
A *	RRRLF
B *	BIS
C *	NISCAIR
D *	National Library, Kolkata
E *	None of the above
Marks *	1
Answer *	c

42

Question Description *	Name the oldest Library Association in Goa
A *	Association of College Librarians of Goa
B *	Goa Academic Library Association
C *	Gomantak Granthalay Sangh
D *	Goa Granthapal Sanghatana
E *	None of the above
Marks *	1
Answer *	c

43

Question Description *	Feedback mechanism is a part of which service?
A *	Reprography
B *	CAS
C *	SDI
D *	ILL
E *	None of the above
Marks *	1
Answer *	c

44

Question Description *	Which of the following is not a Primary Source of information?
A *	Theses
B *	Patents
C *	Conference Papers
D *	Reference books
E *	None of the above
Marks *	1
Answer *	d

45

Question Description *	Which page is the most important source of information to a cataloguer?
A *	Cover Page
B *	Back Page
C *	Title Page
D *	Half – title Page
E *	None of the above
Marks *	1
Answer *	c

46

Question Description *	What type is a Classified catalogue ?
A *	Title catalogue
B *	Name catalogue
C *	Author catalogue
D *	Subject catalogue
E *	None of the above
Marks *	1
Answer *	d

47	Question Description *	The process of removing books which are not of any further use is called:
	A *	Stock Verification
	B *	Weeding
	C *	Stock rectification
	D *	Withdrawing
	E *	None of the above
	Marks *	1
	Answer *	b

48	Question Description *	What is Bibliography?
	A *	A list of published books
	B *	A list of books available in a library
	C *	A list of books available in member libraries
	D *	A list of journals
	E *	None of the above
	Marks *	1
	Answer *	a

49	Question Description *	'LAN' stands for.....
	A *	Library Automation Network
	B *	Library And Network
	C *	Library Area Network
	D *	Local Area Network
	E *	None of the above
	Marks *	1
	Answer *	d

50

Question Description *	'RFID' Technology is used in .....
A *	Acquisition
B *	Serial Control
C *	Circulation Control
D *	OPAC
E *	None of the above
Marks *	1
Answer *	c

51

Question Description *	Reading Center, story hours, exhibition and reading to literature are forms of ....
A *	Extension Service
B *	Service of Public Library
C *	Reference Service
D *	All Three
E *	None of the above
Marks *	1
Answer *	a

52

Question Description *	'Blog' is a :
A *	On-line Journal
B *	Internet Journal
C *	Dynamic content on Web
D *	Search Engine
E *	None of the above
Marks *	1
Answer *	c

53

Question Description *	The firsts edition of DDC consisted of .....pages
A *	144
B *	154
C *	44
D *	124
E *	None of the above
Marks *	1
Answer *	c

54

Question Description *	When did Shannon and Weaver put forth the mathematical model of communication?
A *	1938
B *	1942
C *	1945
D *	1949
E *	None of the above
Marks *	1
Answer *	d

55

Question Description *	Who describes the library as a public institution charged with the collection of books to make these accessible for users?
A *	Melvil Dewey
B *	A.P.J. Abdul Kalam
C *	E.J. Coates
D *	S.R. Ranganathan
E *	None of the above
Marks *	1
Answer *	d



56

Question Description *	The National Library, Kolkata was earlier known as
A *	The Imperial Library
B *	The Asiatic Society Library
C *	The National Public Library
D *	Connemera Public Library
E *	None of the above
Marks *	1
Answer *	a

57

Question Description *	ISDN stands for
A *	International Standard Digital Network
B *	International Standard Distributed Network
C *	Integrated Services Digital Network
D *	Integrated Services Distributed Network
E *	None of the above
Marks *	1
Answer *	c

58

Question Description *	One of the following has designed the model of communication
A *	Shannon & Weaver
B *	Ranganathan & Neelmeghan
C *	Losswell & Gerber
D *	Blake & Mouten
E *	None of the above
Marks *	1
Answer *	a

59

Question Description *	Who enunciated the five fundamental categories?
A *	Benjamin A. Custer
B *	Paul Otlet
C *	S.R.Ranganathan
D *	W.C.Sayers
E *	None of the above
Marks *	1
Answer *	c

60

Question Description *	The smallest unit of data in a database is:
A *	Record
B *	File
C *	Field
D *	Table
E *	None of the above
Marks *	1
Answer *	c