



Goa Staff Selection Commission

6th Floor, 3rd Lift, SPACES Building, Patto Plaza, Panaji-Goa – 403001.

COMPUTER BASED TEST

Post Name : Drawing Teachers in Secondary Schools

1

Question Description *	आज्जी काणी सांगतना म्हणटा..... 'काणी काणी कोतवा, म्हातारेल्या
A *	पुता
B *	नातवा
C *	पुडव्या
D *	कापडा
E *	None of the above
Marks *	1
Answer *	b

2

Question Description *	‘देव तुमचें वरें करतलो’ ह्या वाक्यांत जो क्रियापदाचो काळ आयला, तो
A *	वर्तमानकाळ
B *	भूतकाळ
C *	भविश्यकाळ
D *	चालंतकाळ
E *	None of the above
Marks *	1
Answer *	c

3

Question Description *	गोसाळयाची वात, दुदयाचो तोरो, पेरीचो धोडो जाल्यार तवश्याची
A *	पिपरी
B *	कोमरी
C *	कळी
D *	बोंगो
E *	None of the above
Marks *	1
Answer *	a

4

Question Description *	‘निसर्ग’ ह्या उतराक कोंकणीत आनी खंयचें उतर वापरतात ?
A *	प्राकृत
B *	समय
C *	सैम
D *	सीमा
E *	None of the above
Marks *	1
Answer *	c

5	Question Description *	सूर्य आनी उदय हिं उतरां एकाठांय येतगच आमकां उतर मेळटा.
	A *	सर्वोदया
	B *	सूर्यदा
	C *	सूर्योदय
	D *	सर्वदा
	E *	None of the above
	Marks *	1
	Answer *	c
6	Question Description *	‘पणस’ हें एकवचनी उतर, ताचें भोव वाचनी रूप जाता
	A *	पणसुल
	B *	चाको
	C *	पणस
	D *	कुवलो
	E *	None of the above
	Marks *	1
	Answer *	c
7	Question Description *	उदेता तो अस्तमता जाल्यार फुलता तो
	A *	फुलयता
	B *	बावता
	C *	भिवयता
	D *	बागडता
	E *	None of the above
	Marks *	1
	Answer *	b

8	Question Description *	गिरी आनी ईश हिं उतरां एकाठांय येतगच आमकां उतर मेळटा.
	A *	गिरीईश
	B *	गरिश
	C *	इशगिरी
	D *	गिरीश
	E *	None of the above
	Marks *	1
	Answer *	d
9	Question Description *	प्रती आनी एक हिं उतरां एकाठांय येतगच आमकां उतर मेळटा.
	A *	परतेक
	B *	प्रतेक
	C *	परितिक
	D *	प्रत्येक
	E *	None of the above
	Marks *	1
	Answer *	d
10	Question Description *	कवचेचीं कांकणा घेवन येता तो वळार आनी मातयेचीं मडकीं घेवन येता तो
	A *	कांसार
	B *	कुंभार
	C *	मेस्त
	D *	गंवणो
	E *	None of the above
	Marks *	1
	Answer *	b

11

Question Description *	ABCD form a sentence. Identify the part of the sentence that has an error. If there is no error select E.
A *	My mother's
B *	spectacles
C *	is missing
D *	yet again
E *	None of the above
Marks *	1
Answer *	c

12

Question Description *	Identify the correctly spelled word from the options below:
A *	sucumb
B *	receipt
C *	psychiatrist
D *	independance
E *	None of the above
Marks *	1
Answer *	b

13

Question Description *	Choose the correct one-word substitute for the underlined phrase: Raj was <u>the villain</u> in the film.
A *	Protagonist
B *	Sidekick
C *	Antagonist
D *	Mastermind
E *	None of the above
Marks *	1
Answer *	c

14

Question Description *	Choose the correct alternative: You'll be there, _____
A *	Will you?
B *	Would you?
C *	Won't you?
D *	Isn't it?
E *	None of the above
Marks *	1
Answer *	c

15

Question Description *	ABCD form a sentence. Identify the part of the sentence that has an error. If there is no error select E.
A *	If you really want to save money
B *	you must
C *	cut down on
D *	online shopping
E *	None of the above
Marks *	1
Answer *	e

16	Question Description *	ABCD form a sentence. Identify the part of the sentence that has an error. If there is no error select E.
	A *	On a day off
	B *	Roshni prefers
	C *	being on social media
	D *	to going out and meeting friends
	E *	None of the above
	Marks *	1
	Answer *	e

17	Question Description *	Choose the correct one-word substitute for the underlined phrase: Taking the lift is not good for those who have a <u>fear of confined places</u> .
	A *	Agoraphobia
	B *	Plutophobia
	C *	Claustrophobia
	D *	Dentophobia
	E *	None of the above
	Marks *	1
	Answer *	c

18	Question Description *	Choose the alternative that is opposite in meaning to the underlined word: The court declared him <u>innocent</u> .
	A *	free
	B *	guilty
	C *	wicked
	D *	illegal
	E *	None of the above
	Marks *	1
	Answer *	b

19

Question Description *	Identify the correctly spelled word from the options below:
A *	maintainance
B *	merrmaid
C *	acces
D *	judgement
E *	None of the above
Marks *	1
Answer *	d

20

Question Description *	Choose the alternative that is opposite in meaning to the underlined word: The security guard needs to be more <u>vigilant</u> at night.
A *	loud
B *	innocent
C *	careful
D *	cautious
E *	None of the above
Marks *	1
Answer *	e

21

Question Description *	The sum of first 10 natural numbers is -----.
A *	5050
B *	505
C *	100
D *	55
E *	None of the above
Marks *	1
Answer *	d

22

Question Description *	If x is a positive real number and $x^2 = 2$, then $x^3 =$ _____
A *	$\sqrt{2}$
B *	$2\sqrt{2}$
C *	$3\sqrt{2}$
D *	4
E *	None of the above
Marks *	1
Answer *	b

23

Question Description *	$569.32 \div 100 =$ _____
A *	56.932
B *	5.6932
C *	0.56932
D *	0.056932
E *	None of the above
Marks *	1
Answer *	b

24

Question Description *	A car can cover a distance of 24 km in 1 litre of petrol. How much distance it will cover in 3.5 litres of petrol?
A *	72 km
B *	25km
C *	84 km
D *	48km
E *	None of the above
Marks *	1
Answer *	c

25

Question Description *	If $x^2 - x - 1 = 0$, then the value of $x^3 - 2x + 1$ is _____
A *	0
B *	2
C *	3
D *	4
E *	None of the above
Marks *	1
Answer *	b

26

Question Description *	Which among the following is divisible by 5?
A *	72980
B *	70892
C *	72981
D *	89247
E *	None of the above
Marks *	1
Answer *	a

27

Question Description *	$6 + 4 \times 5 - 3$ is -----
A *	23
B *	47
C *	20
D *	11
E *	None of the above
Marks *	1
Answer *	a

28

Question Description *	The difference between the greatest 5 digit number and the greatest 3 digit number is ----
A *	99900
B *	99990
C *	99000
D *	99899
E *	None of the above
Marks *	1
Answer *	c

29

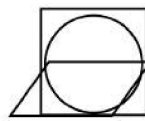
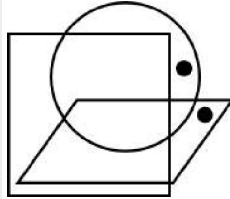
Question Description *	A wire bent in the form of circle of radius 42 cm is cut and again bent in the form of a square. The ratio of the regions enclosed by the circle and the square in the two cases is given by _____
A *	11 : 12
B *	21 : 33
C *	22 : 33
D *	14 : 11
E *	None of the above
Marks *	1
Answer *	d

30

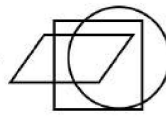
Question Description *	The mode of the data 2,7,8,7,3,2,7,4,7,9 is -----
A *	2
B *	7
C *	3
D *	56
E *	None of the above
Marks *	1
Answer *	b

Question Description *

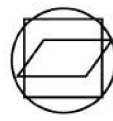
Select the figure among the answer figures numbered 1, 2, 3 and 4 that satisfy the same conditions of placement of the dots as shown in the figure below (question figure).



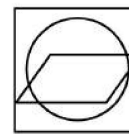
1



2



3



4

A *

1

B *

2

C *

3

D *

4

E *

None of the above

Marks *

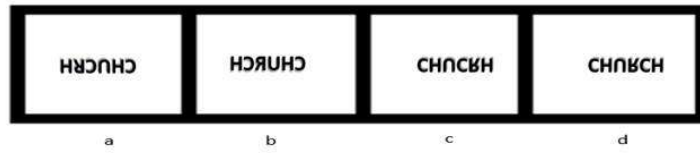
1

Answer *

b

Question Description *

Choose the option which resembles the mirror image of the following.

CHURCH

A *

a

B *

b

C *

c

D *

d

E *

None of the above

Marks *

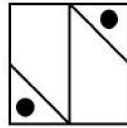
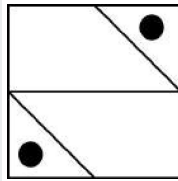
1

Answer *

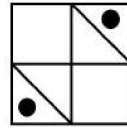
b

Question Description *

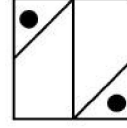
If the question figure given below is rotated by 90 degrees in clockwise direction, then what will be the next figure?



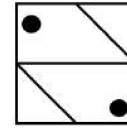
1



2



3



4

A *

1

B *

2

C *

3

D *

4

E *

None of the above

Marks *

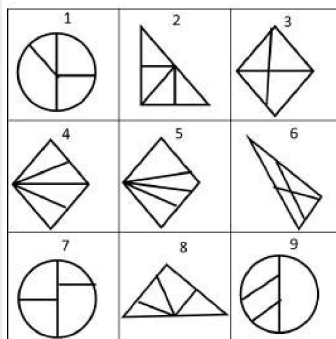
1

Answer *

c

Question Description *

Given below is set of figures that are numbered from 1 to 9. Classify the figures into 3 groups with similar properties and choose the correct option.



A *

(1,9,3), (7,4,5), (2,6,8)

B *

(3,4,2), (5,6,8), (1,7,9)

C *

(1,7,9), (3,4,5), (2,6,8)

D *

(2,6,1), (7,8,9), (3,4,5)

E *

None of the above

Marks *

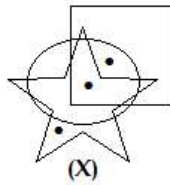
1

Answer *

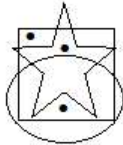
c

Question Description *

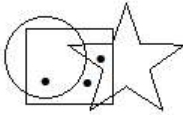
Select the figure which satisfies the same conditions of placement of the dot as in given figure X.



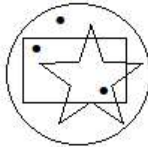
A *



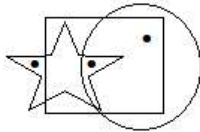
B *



C *



D *



E *

None of the above

Marks *

1

Answer *

d

36

Question Description *

Given below are codes for a few alphabets and based on the coding answer the following questions.

Alphabets	P	T	A	M	E	Q	S
Symbol	^	*	\$!	<	>	@

How will the word "PASTE" be written in the above language?

A *

^\$@*<

B *

^!\$@<

C *

^\$@<*

D *

!\$@*<

E *

None of the above

Marks *

1

Answer *

a

37

Question Description *

In the following question find out the alternative which will replace the question mark.

REAL: LARE :: 5896: ?

A *

6598

B *

8965

C *

9658

D *

6958

E *

None of the above

Marks *

1

Answer *

d

38

Question Description *

A is the son of B, but B is not the father of A. How is B related to A?

A *

Mother

B *

Uncle

C *

Son

D *

Grandfather

E *

None of the above

Marks *

1

Answer *

a

39

Question Description *

6	9	15
8	12	20
4	6	?

Find out the missing number

A *

5

B *

10

C *

15

D *

21

E *

None of the above

Marks *

1

Answer *

b

40

Question Description *

Four of the five words stated below are alike in a certain way and form a group but one does not belong to the group. Find out the odd word.

Eagle, Bat, Falcon, Owl, crow

A *

Bat

B *

Owl

C *

Crow

D *

Eagle

E *

None of the above

Marks *

1

Answer *

a

41

Question Description *

What do you call a company that produces books?

A *

Book designing House

B *

Publisher

C *

Media House

D *

Printer

E *

None of the above

Marks *

1

Answer *

b

42	Question Description *	'Dancing Girl' is a prehistoric Sculpture made in...
	A *	Gold
	B *	Stone
	C *	Copper
	D *	Bronze
	E *	None of the above
	Marks *	1
	Answer *	d
43	Question Description *	Who is the artist who created 'Cloud Gate'?
	A *	Subodh Gupta
	B *	Anish Kapoor
	C *	Sudarshan Shetty
	D *	Anita Dube
	E *	None of the above
	Marks *	1
	Answer *	b
44	Question Description *	Who made 'the object to be destroyed' an art object in 1923?
	A *	Man Ray
	B *	Marcel Duchamp
	C *	Joseph Kosuth
	D *	Salvador Dali
	E *	None of the above
	Marks *	1
	Answer *	a

45	Question Description *	What are the careers in applied art?
	A *	Manufacturing and sale of Consumer goods
	B *	Sculpture making, Metal craft, Canvas Painting etc.
	C *	Mural making, Bead work, Sculpture etc.
	D *	Advertising Design, Fashion design, Photography, etc.
	E *	None of the above
	Marks *	1
	Answer *	d
46	Question Description *	Who painted ‘the Luncheon on the Grass’?
	A *	Monet
	B *	Manet
	C *	Rodin
	D *	Degas
	E *	None of the above
	Marks *	1
	Answer *	b
47	Question Description *	Tiny dots that forms images on monitor or screen are called?
	A *	Squares
	B *	Pixels
	C *	Digits
	D *	Cubes
	E *	None of the above
	Marks *	1
	Answer *	b

48	Question Description *	Significance of pyramid in Egyptian art...
	A *	Preserving of valuable things.
	B *	Performing prayers together.
	C *	Integration between self and soul.
	D *	Relates to mountain for climbing.
	E *	None of the above
	Marks *	1
	Answer *	c
49	Question Description *	What does Applied art mean?
	A *	Applied art refers to the idea of art painted on to canvas
	B *	Applied art refers to Dance Performances
	C *	Applied art refers to the idea of art being applied to a useful object
	D *	Applied art refers to non-profit making art business
	E *	None of the above
	Marks *	1
	Answer *	c
50	Question Description *	Renaissance art aimed at...
	A *	Color scheme and perfection of geometry
	B *	Volume, contrast and study of architectural structure
	C *	Perspective, perfection of human body with gestures, religious themes and oil color technique
	D *	Study of plaster, space and simplified forms
	E *	None of the above
	Marks *	1
	Answer *	c

51	Question Description *	Which of the following is Design Principal?
	A *	Focus
	B *	Rhythm
	C *	Pointillism
	D *	Negativity
	E *	None of the above
	Marks *	1
	Answer *	b
52	Question Description *	Mughal miniature included...
	A *	Imaginative compositions
	B *	Realism and Persian influences
	C *	Raga-ragini compositions
	D *	Bold lines and thick application of colour
	E *	None of the above
	Marks *	1
	Answer *	b
53	Question Description *	Who painted 'The Broken column'?
	A *	Frida Kahlo
	B *	Mary Cassatt
	C *	Georgia O'Keeffe
	D *	Cindy Sherman
	E *	None of the above
	Marks *	1
	Answer *	a

54	Question Description *	The technique developed by Abanindranath Tagore...
	A *	Impasto technique
	B *	Tempera technique
	C *	Wash technique
	D *	Spray technique
	E *	None of the above
	Marks *	1
	Answer *	c
55	Question Description *	French impressionist and painter...
	A *	Piet Mondrian
	B *	Marc Chagall
	C *	Rennie Margaret
	D *	Paul Cezanne
	E *	None of the above
	Marks *	1
	Answer *	d
56	Question Description *	One of the famous Indian Graphic designer?
	A *	David Carson
	B *	Paul Rand
	C *	Susan Kare
	D *	R. K. Joshi
	E *	None of the above
	Marks *	1
	Answer *	d

57	Question Description *	Golden period of sculpture in India...
	A *	Mathura
	B *	Gandhara
	C *	Chalukya
	D *	Gupta
	E *	None of the above
	Marks *	1
	Answer *	d
58	Question Description *	What do you call a company that produces books?
	A *	Book designing House
	B *	Publisher
	C *	Media House
	D *	Printer
	E *	None of the above
	Marks *	1
	Answer *	b
59	Question Description *	Greek mythology influenced Indian artist...
	A *	Nalini Malani
	B *	Anju Dodia
	C *	Nilima Sheikh
	D *	Shobha Ghare
	E *	None of the above
	Marks *	1
	Answer *	b

60

Question Description *	What does J.J stand for in the title ‘Sir J.J School of Art’?
A *	Jamsetjee Jeejebhoy
B *	Jeram Jariwala
C *	Jayanti Jeejebhoy
D *	Jahangir
E *	None of the above
Marks *	1
Answer *	a